

# Addition of Integers

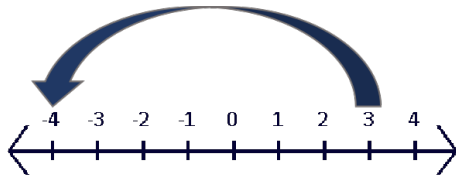
Grade 6 Number Line Worksheet

Date: \_\_\_\_\_

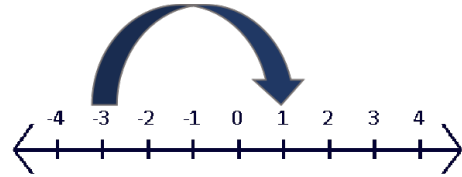
Name: \_\_\_\_\_

LET'S MAKE LEARNING FUN

**Example 1:**  $3 + (-7) = -4$

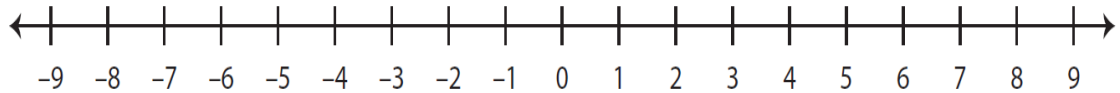


**Example 2:**  $-3 + 4 = 1$

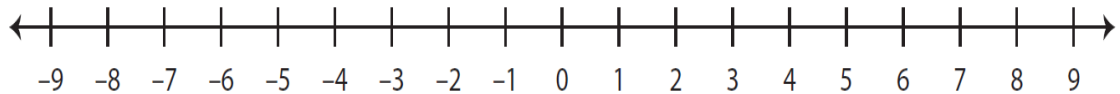


1. Find the sum using the number line provided.

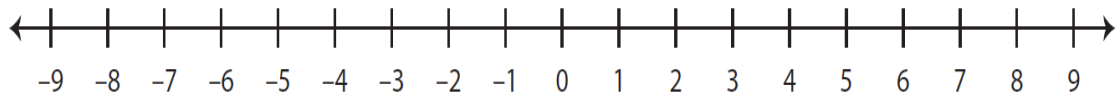
a.  $-3 + (-4) =$  \_\_\_\_\_



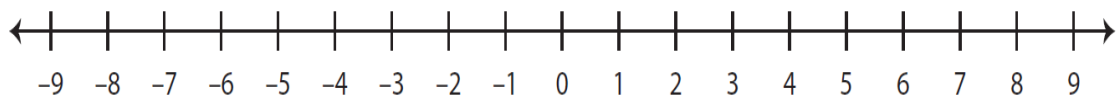
b.  $1 + 7 =$  \_\_\_\_\_



c.  $3 + (-12) =$  \_\_\_\_\_



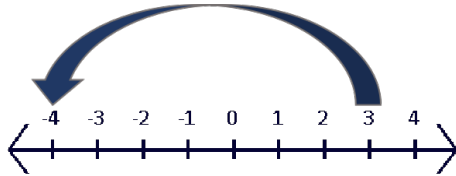
d.  $4 + (-5) =$  \_\_\_\_\_



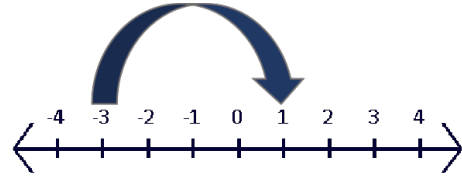
# Addition of Integers

Grade 6 Number Line Answer Sheet

**Example 1:**  $3 + (-7) = -4$

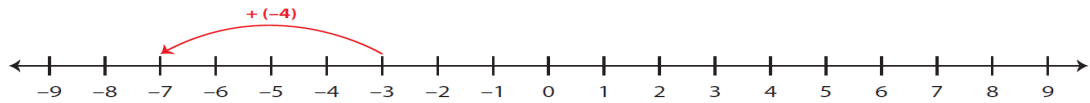


**Example 2:**  $-3 + 4 = 1$

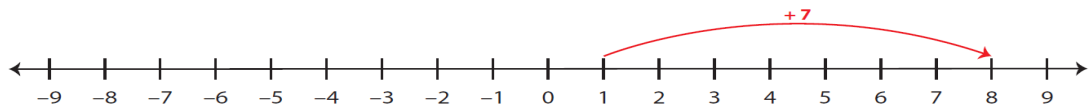


1. Find the sum using the number line provided.

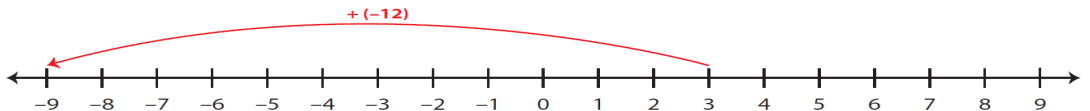
a.  $-3 + (-4) = \underline{-7}$



b.  $1 + 7 = \underline{8}$



c.  $3 + (-12) = \underline{-9}$



d.  $4 + (-5) = \underline{-1}$

