

Scaled Pictographs

Grade 3 Data and Graphing Worksheet



Date: _____

Name: _____

LET'S MAKE LEARNING FUN



Leo recorded the number of pizzas sold over five days.

Read the chart and answer the questions.



- How many pizzas did he sell on Sunday? _____
- Which day did he sell the most pizzas? _____
- Which day did he sell the least pizzas? _____
- How many days did he repeatedly sell 20 pizzas? _____
- How many pizzas did he sell in seven days? _____
- How many less pizzas were sold on Friday than Saturday? _____
- Which day did he sell 30 pizzas? _____

Answers – Scaled Pictographs



- How many pizzas did he sell on Sunday? 20 pizzas
- Which day did he sell the most pizzas? Tuesday
- Which day did he sell the least pizzas? Friday
- How many days did he repeatedly sell 20 pizzas? 3 days
- How many pizzas did he sell in seven days? 175 pizzas
- How many less pizzas were sold on Friday than Saturday? 5 pizzas
- Which day did he sell 35 pizzas? Wednesday